



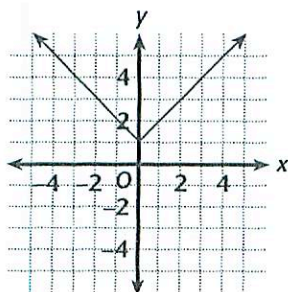
Lesson Activity

6.4 Working Backwards from Graphs

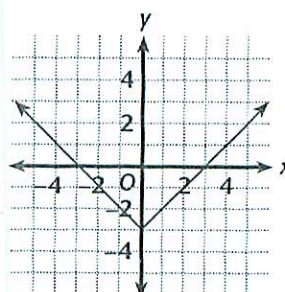
You can look at a graph of an absolute-value function in order to find its equation. In this activity, you will be given graphs and will find the equations that satisfy those graphs.

Find the equation for each graph.

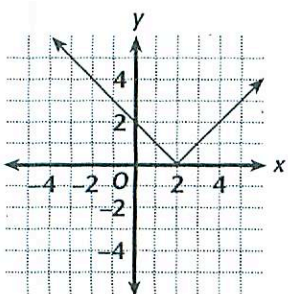
1.



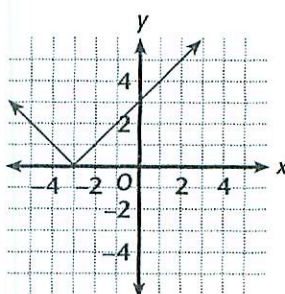
2.



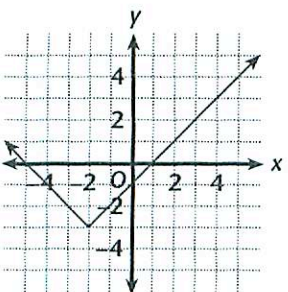
3.



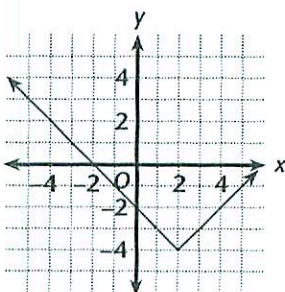
4.



5.



6.



7. Explain how you found the equations of the graphs.
